

Ime in Priimek : \_\_\_\_\_


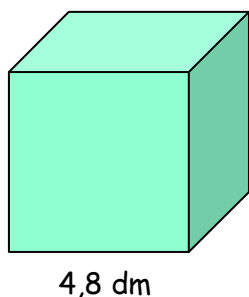
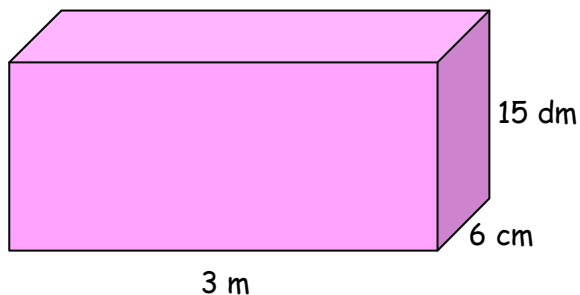
Datum : \_\_\_\_\_

**www.otroci.org**

Otrokom in staršem prijazna  
stran na internetu

## **POVRŠINA**

### 1. IZRAČUNAJ POVRŠINO NARISANEGA TELESA.



### 2. IZRAČUNAJ POVRŠINO KVADRA, ČE POZNAŠ DOLŽINE STRANIC.

a)  $a = 4 \text{ cm}$ ,  $b = 3 \text{ cm}$ ,  $c = 2 \text{ cm}$

b)  $a = 13 \text{ cm}$ ,  $b = 2,4 \text{ cm}$ ,  $c = 60 \text{ mm}$



c)  $a = 7 \text{ m}$ ,  $b = 5,2 \text{ dm}$ ,  $c = 20 \text{ cm}$

Ime in Priimek : \_\_\_\_\_

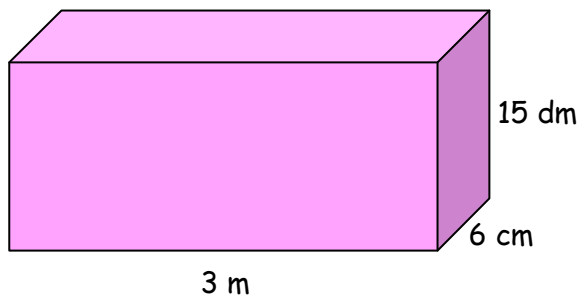
Datum : \_\_\_\_\_

**www.otroci.org**

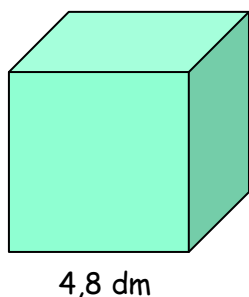
Otrokom in staršem prijazna  
stran na internetu

## **POVRŠINA**

### 1. IZRAČUNAJ POVRŠINO NARISANEGA TELESA.



$$P = 95400 \text{ cm}^2 = 954 \text{ dm}^2$$




$$P = 13824 \text{ cm}^2$$

### 2. IZRAČUNAJ POVRŠINO KVADRA, ČE POZNAŠ DOLŽINE STRANIC.

a)  $a = 4 \text{ cm}, b = 3 \text{ cm}, c = 2 \text{ cm}$

$$P = 520 \text{ cm}^2$$



b)  $a = 13 \text{ cm}, b = 2,4 \text{ cm}, c = 60 \text{ mm}$

$$P = 24720 \text{ mm}^2$$



c)  $a = 7 \text{ m}, b = 5,2 \text{ dm}, c = 20 \text{ cm}$

$$P = 7768 \text{ dm}^2$$