

Ime in Priimek : _____

Datum : _____

www.otroci.org

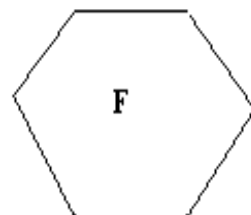
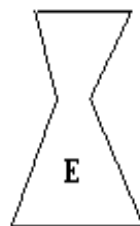
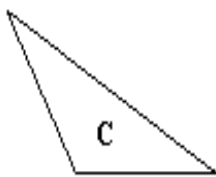
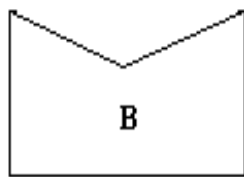
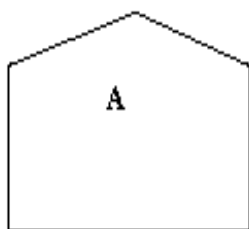
Otrokom in staršem prijazna
stran na internetu

VEČKOTNIKI 2

1. ZAPIŠI, KATERI OD NARISANIH LIKOV SO:

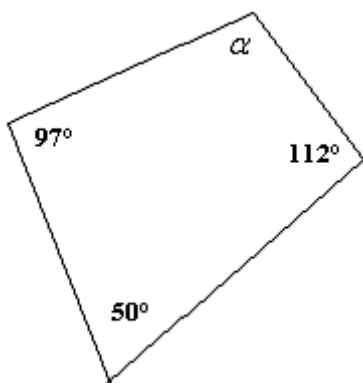
a) vdrti večkotniki

b) izbočeni večkotniki

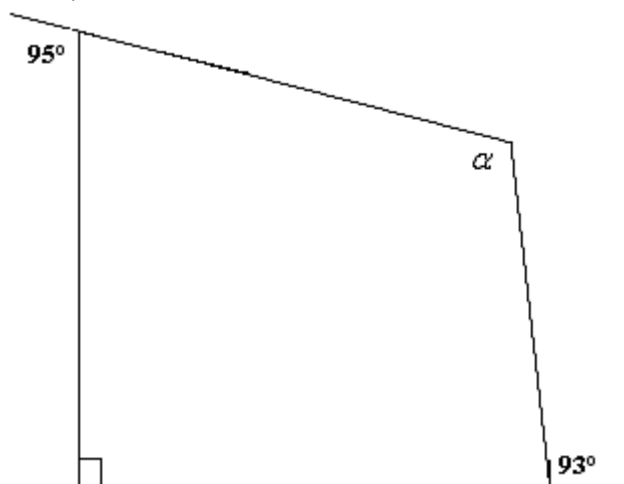


2. DOLOČI VELIKOST KOTA α .

a)



b)



a) $\alpha =$ _____

b) $\alpha =$ _____